




Independent Practice

Name: Answer Key Date: _____

Part I: Diagrams

Herbivore


Eats only plants.



A

Carnivore


Eats only meat.



C

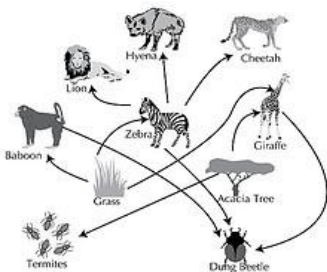
Omnivore

Eats only plants and meat.



E

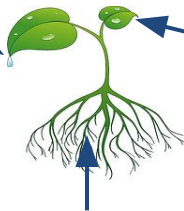
Food Chain



B

Photosynthesis

Makes food and gives off oxygen.



Takes in carbon dioxide

Takes in water and nutrients.

D

Producer

I make my own food in my leaves.



F

Part II: Break the Code

1. Ecosystem
2. Food web
3. Omnivore
4. Carnivore
5. Consumer
6. Decomposer
7. Herbivore
8. Producer